


QUIK THINKAZ



Name the following components and draw their circuit symbol.

1



2



3




4



5



6



7



8




9



10



QUIK THINKAZ

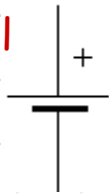


ANSWERS:

1



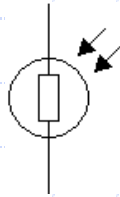
Cell



2



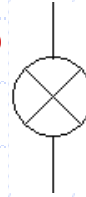
LDR



3



Bulb



4



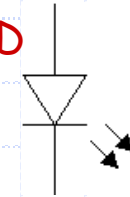
Electrolytic Capacitor




5



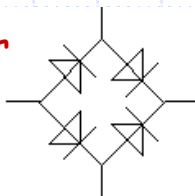
LED



6



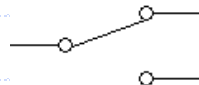
Bridge Rectifier



7



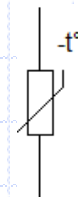
Slide Switch



8



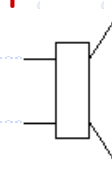
Thermistor



9



Speaker



10



Microswitch

