


QUIK THINKAZ



NAME THE FOLLOWING INPUT COMPONENTS

1



2



3



4



5



6




7



8



9



10



QUIK THINKAZ



ANSWERS:

1



LDR

2



ROCKER SWITCH

3



PIR SENSOR

4



CLICK SWITCH

5



VARIABLE CAPACITOR

6



ULTRASONIC TRANSDUCER

7




TOGGLE SWITCH

8



REED SWITCH

9



POTENTIOMETER

10



THERMISTOR